



Χρωμάτισε κυκλάκια
και υπολόγισε το συμπλήρωμα.


1



$$3 + \dots = 5$$



$$8 + \dots = 10$$



$$4 + \dots = 7$$



$$6 + \dots = 10$$



$$5 + \dots = 8$$



$$4 + \dots = 10$$

Υπολόγισε το συμπλήρωμα.

$$2 + \dots = 7$$

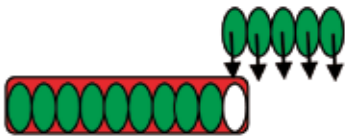
Υπολόγισε το συμπλήρωμα.

$$7 + \dots = 10$$

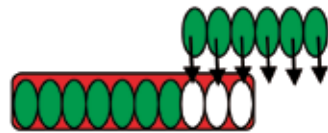


2

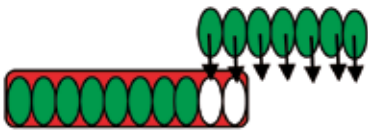
Υπολόγισε τους αριθμούς που λείπουν.



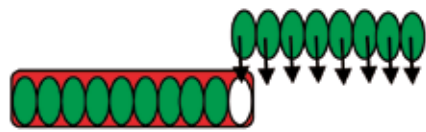
$$9 + 5 = \square$$



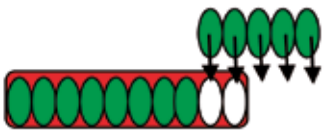
$$7 + 6 = \square$$



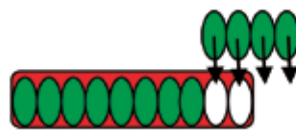
$$8 + 7 = \square$$



$$9 + 8 = \square$$



$$8 + 5 = \square$$



$$8 + 4 = \square$$